





Flower Tally and Pictogram

Look at the flowers in the garden. Use this sheet to complete your worksheets.

Key:			
Rose	Poppy	Buttercup	Sunflower
			



twinkl.com


Flower Tally and Pictogram

	Flowers			
	Roses	Sunflowers	Buttercups	Poppies
Tally				
Total				

Number Of Flowers				
	Roses	Sunflowers	Buttercups	Poppies

Use the graph to
show how many of
each flower.

Key:



2 flowers



1 flower

Flower Tally and Pictogram

Use your pictogram to answer these questions.

1. How many roses are there? _____

2. How many sunflowers are there? _____

3. How many buttercups are there? _____

4. How many poppies are there? _____

5. How many more buttercups than roses? _____

6. How many less sunflowers than poppies? _____

7. How many flowers altogether? _____

8. Can you think of any more interesting questions that can be asked about your pictogram?
